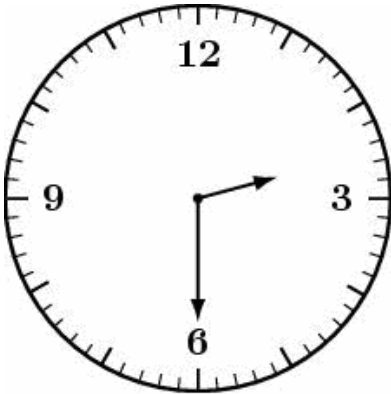



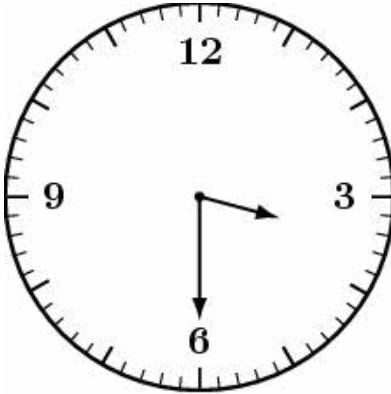
找出時鐘的正確時間？在 裡打



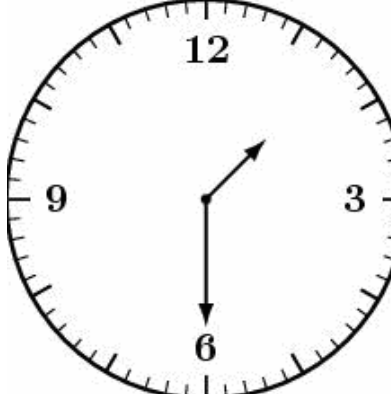
(1) 1 點半
 (2) 5 點半
 (3) 10 點半
 (4) 2 點鐘
 (5) 2 點半



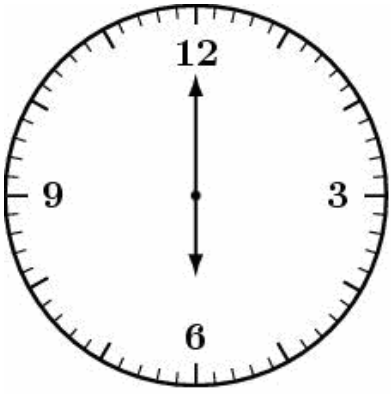
(1) 1 點半
 (2) 10 點半
 (3) 1 點鐘
 (4) 3 點鐘
 (5) 3 點半



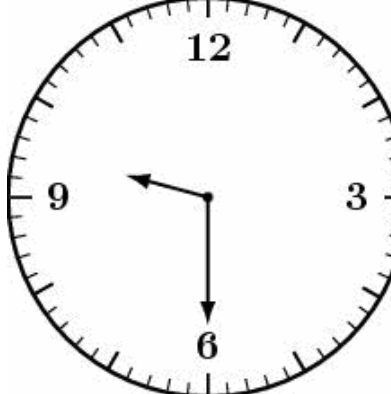
(1) 2 點半
 (2) 5 點鐘
 (3) 3 點半
 (4) 4 點鐘
 (5) 8 點半



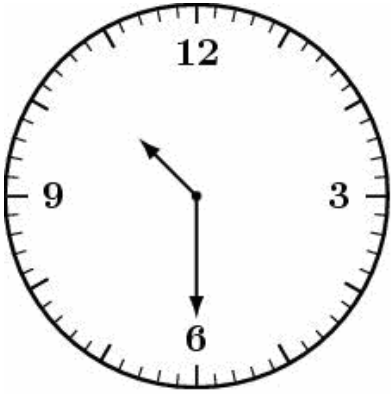
(1) 2 點半
 (2) 1 點半
 (3) 5 點半
 (4) 4 點鐘
 (5) 1 點鐘




(1) 1 點半
 (2) 11 點鐘
 (3) 4 點半
 (4) 8 點鐘
 (5) 6 點鐘



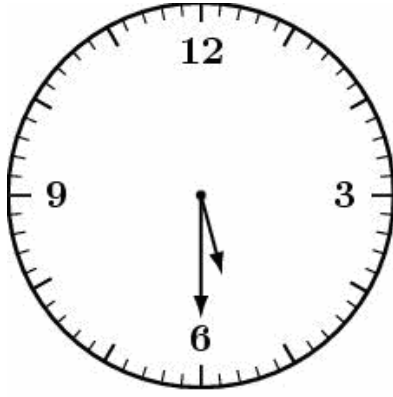
(1) 8 點半
 (2) 6 點半
 (3) 9 點半
 (4) 9 點鐘
 (5) 10 點半



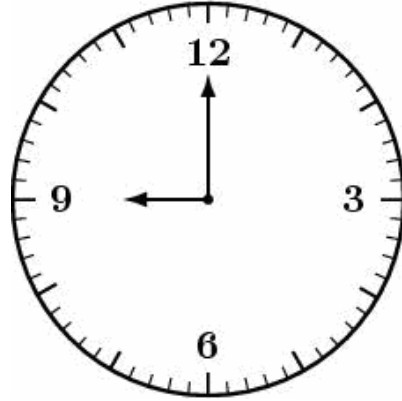
(1) 11 點半
 (2) 10 點半
 (3) 10 點鐘
 (4) 9 點鐘
 (5) 8 點半




(1) 1 點半
 (2) 2 點半
 (3) 4 點半
 (4) 3 點半
 (5) 3 點鐘



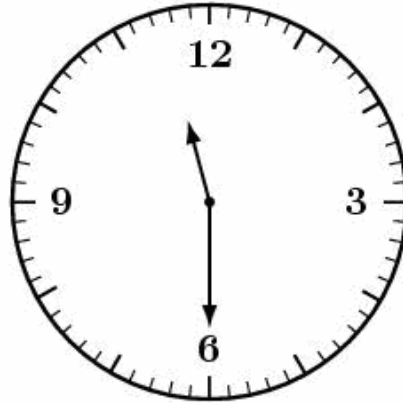
- (1) 4 點^カ半^ク
- (2) 5 點^カ半^ク
- (3) 5 點^カ鐘^シ
- (4) 6 點^カ鐘^シ
- (5) 7 點^カ半^ク




- (1) 3 點^カ鐘^シ
- (2) 9 點^カ半^ク
- (3) 9 點^カ鐘^シ
- (4) 10 點^カ鐘^シ
- (5) 8 點^カ半^ク



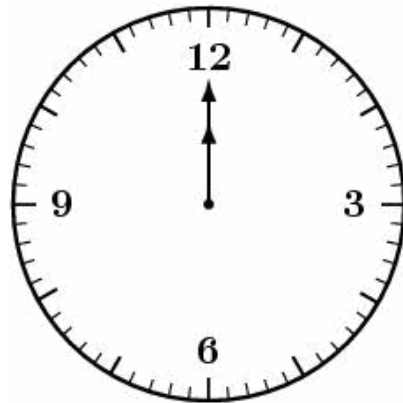
- (1) 4 點^カ半^ク
- (2) 2 點^カ鐘^シ
- (3) 3 點^カ鐘^シ
- (4) 4 點^カ鐘^シ
- (5) 5 點^カ半^ク



- (1) 11 點^カ鐘^シ
- (2) 9 點^カ半^ク
- (3) 10 點^カ鐘^シ
- (4) 11 點^カ半^ク
- (5) 12 點^カ半^ク



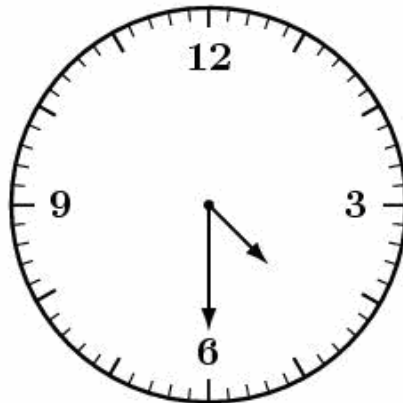
- (1) 11 點^カ半^ク
- (2) 10 點^カ半^ク
- (3) 12 點^カ鐘^シ
- (4) 12 點^カ半^ク
- (5) 1 點^カ半^ク



- (1) 12 點^カ半^ク
- (2) 12 點^カ鐘^シ
- (3) 11 點^カ鐘^シ
- (4) 11 點^カ半^ク
- (5) 10 點^カ鐘^シ



- (1) 11 點^カ鐘^シ
- (2) 10 點^カ半^ク
- (3) 10 點^カ鐘^シ
- (4) 1 點^カ鐘^シ
- (5) 12 點^カ半^ク



- (1) 7 點^カ半^ク
- (2) 6 點^カ半^ク
- (3) 5 點^カ鐘^シ
- (4) 4 點^カ鐘^シ
- (5) 4 點^カ半^ク