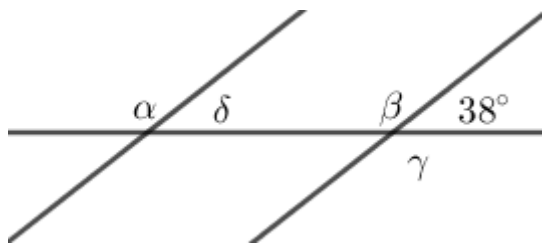


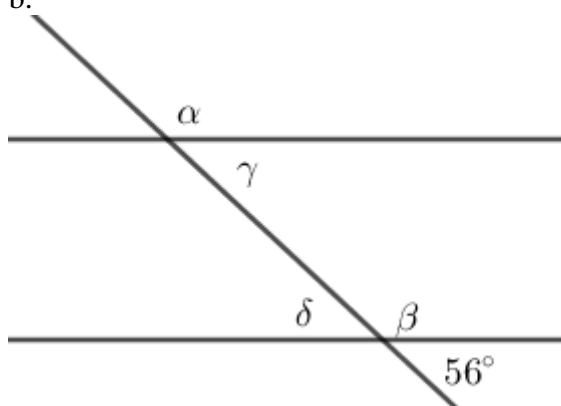
## ZADACI ZA VJEŽBU

1. Ako  $a \parallel b$  odredi veličine nepoznatih kutova  $\alpha$ ,  $\beta$ ,  $\gamma$  i  $\delta$ .

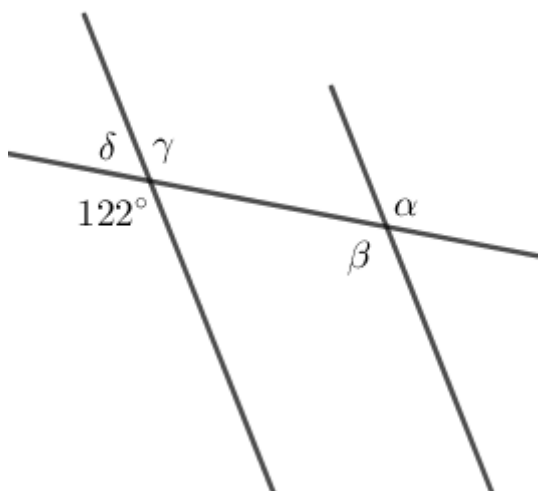
a.



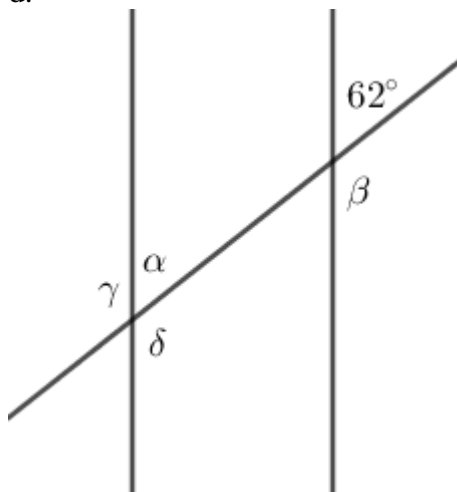
b.



c.



d.



2. Nacrtaj dva usporedna pravca  $k$  i  $p$  te njihovu presječnicu  $d$ . Istom bojom označi kutove istih veličina.