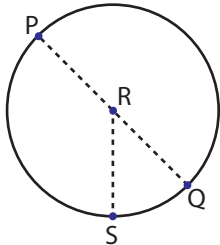


Parts of Circle

Easy: S1

Identify the parts of each circle.

1)

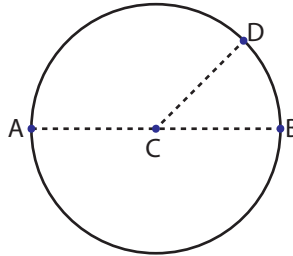


Center = _____

Radius = _____

Diameter = _____

2)

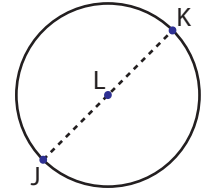


Center = _____

Radius = _____

Diameter = _____

3)

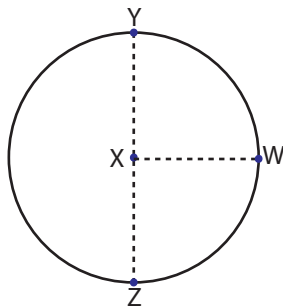


Center = _____

Radius = _____

Diameter = _____

4)

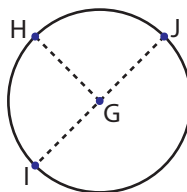


Center = _____

Radius = _____

Diameter = _____

5)

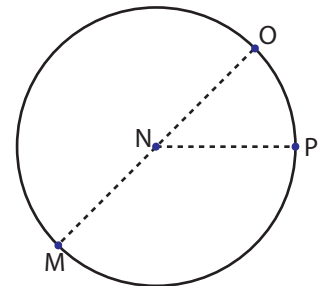


Center = _____

Radius = _____

Diameter = _____

6)

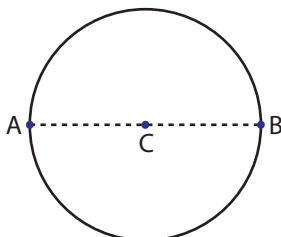


Center = _____

Radius = _____

Diameter = _____

7)

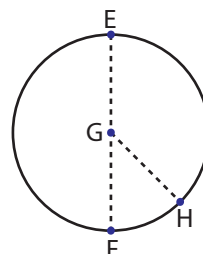


Center = _____

Radius = _____

Diameter = _____

8)

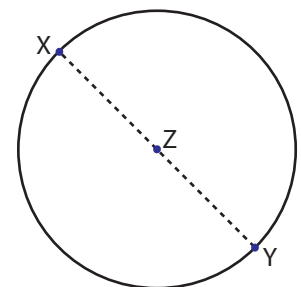


Center = _____

Radius = _____

Diameter = _____

9)



Center = _____

Radius = _____

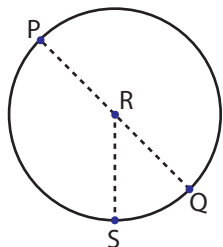
Diameter = _____

Parts of Circle

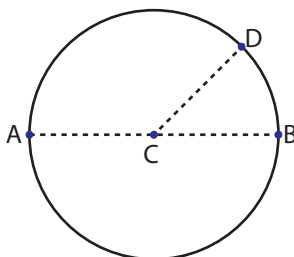
Easy: S1

Identify the parts of each circle.

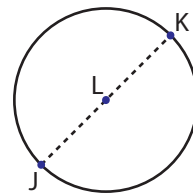
1)

Center = **R** Radius = **RS, RQ, RP** Diameter = **PQ**

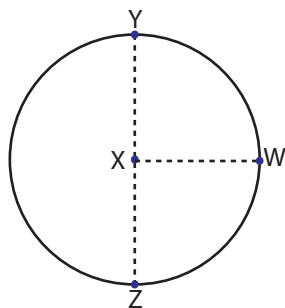
2)

Center = **C** Radius = **CA, CB, CD** Diameter = **AB**

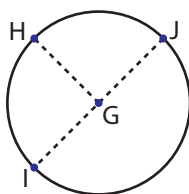
3)

Center = **L** Radius = **LJ, LK** Diameter = **JK**

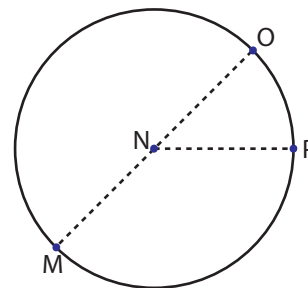
4)

Center = **X** Radius = **XW, XY, XZ** Diameter = **YZ**

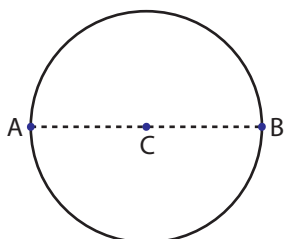
5)

Center = **G** Radius = **GJ, GI, GH** Diameter = **IJ**

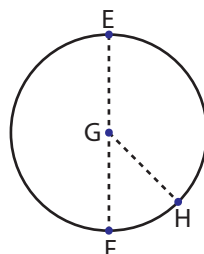
6)

Center = **N** Radius = **NO, NM, NP** Diameter = **MO**

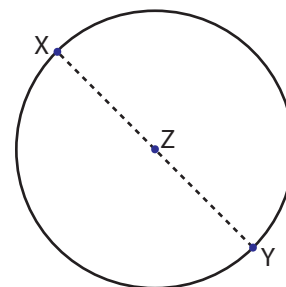
7)

Center = **C** Radius = **CA, CB** Diameter = **AB**

8)

Center = **G** Radius = **GH, GF, GE** Diameter = **EF**

9)

Center = **Z** Radius = **ZX, ZY** Diameter = **XY**