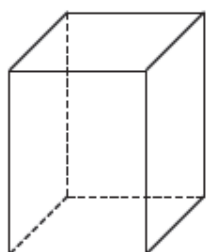
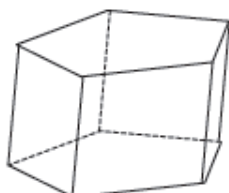


## NASTAVNI LISTIĆ

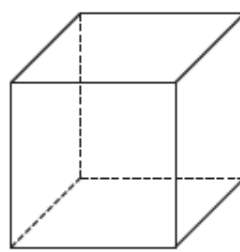
- S koliko je ravnih strana omeđeno svako tijelo na slici?
  - Koliko svako tijelo na slici ima strana (s), vrhova (v), bridova (b)?
  - Uvjeri se da za svako tijelo na slici vrijedi Eulerova formula  $v + s = b + 2$ .



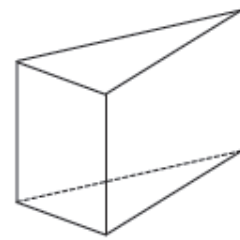
A



B

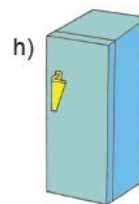
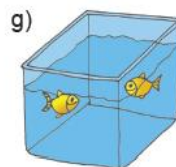
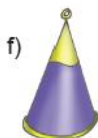

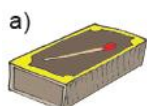


C

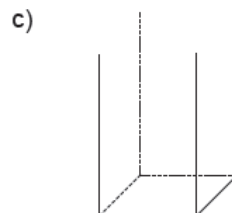
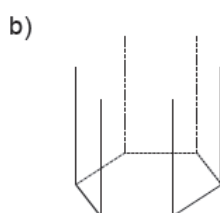
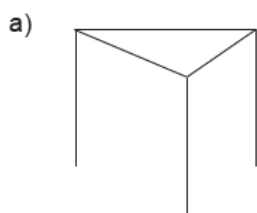


D

- Među predmetima na slici pronađi prizme.



- Skiciraj prizmu kojoj je nacrtana jedna baza.



- Dodaj strane koje nedostaju u mreži prizme.

